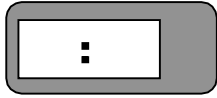


More Practice

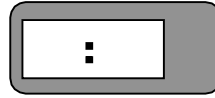
Name _____

Write the time on the digital clock. Then write the time another way.


1. two thirty-seven




2. 15 minutes past 9



3. 42 minutes past 4



4. eleven seventeen




Problem Solving

5. Geoff needs to meet his friends at five forty-five.

The clock shows the time that Geoff arrives.

Is he late, early, or right on time?



6. Deanna needs to meet her mom at the store.

When they meet, her mom looks at her watch and says to Deanna, "You're right on time." What time was Deanna meant to meet her mother?

