


More Practice

Name _____

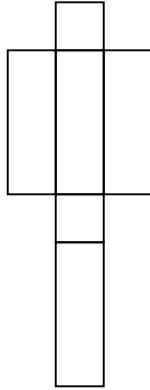
Ring the letter of the correct answer.

1. Which of these nets could be used to make a rectangular prism?

A



B

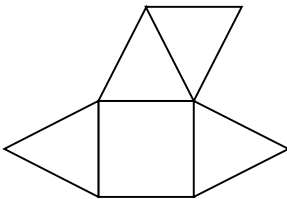


C

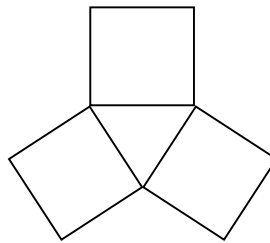


2. Which of these nets could be used to make a square pyramid?

F



G



H

