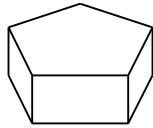


## More Practice

Name \_\_\_\_\_

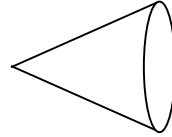
Is the figure a polyhedron? Write *yes* or *no*.  
If yes, write the number of faces.

1.



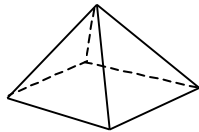
\_\_\_\_\_  
\_\_\_\_\_

2.



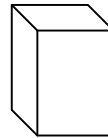
\_\_\_\_\_  
\_\_\_\_\_

3.



\_\_\_\_\_  
\_\_\_\_\_

4.



\_\_\_\_\_  
\_\_\_\_\_

## Problem Solving

Complete the table.

5.

Number of Triangular Prisms	1					
Number of Faces				20		

6.

Number of Cylinders	1					
Number of Faces					10	

7.

Number of Rectangular Prisms	1					
Number of Faces			18			