

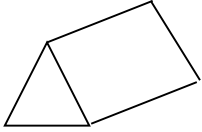
More Practice

Name _____

Write whether the figure is a *plane* figure or a *solid* figure.

If it is a solid, write the number of curved surfaces and the number of flat surfaces.

1. _____ figure



curved surfaces: _____

flat surfaces: _____

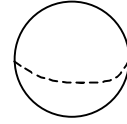
2. _____ figure



curved surfaces: _____

flat surfaces: _____


3. _____ figure



curved surfaces: _____

flat surfaces: _____

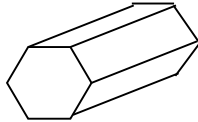
4. _____ figure



curved surfaces: _____

flat surfaces: _____


5. _____ figure



curved surfaces: _____

flat surfaces: _____

6. _____ figure



curved surfaces: _____

flat surfaces: _____

Problem Solving

Circle the letter of the correct answer.

7. A number cube is a good example of a _____.

A sphere

C square pyramid

B triangular prism

D cube

8. A box of cereal is a good example of a _____.

F cylinder

H rectangular prism

G cube

I triangular prism

9. A soup can is a good example of a _____.

A pyramid

C triangular prism

B cone

D cylinder