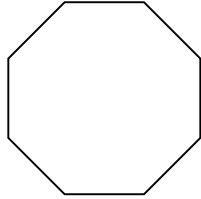


**More Practice**

Name \_\_\_\_\_

Draw a line of symmetry, if possible.

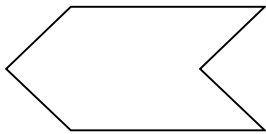
1.



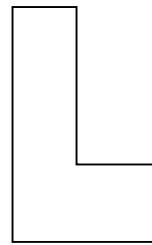
2.



3.

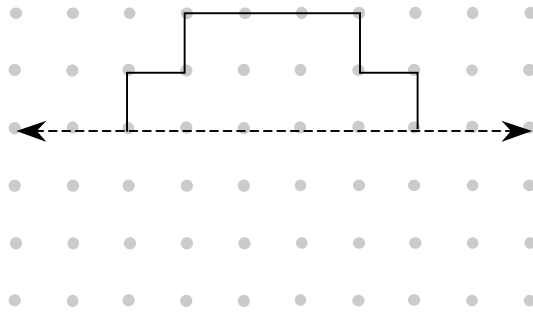


4.



**Problem Solving**

5. The polygon has been divided by a line of symmetry. Complete the polygon so that it is symmetrical.



6. The polygon has been divided by two lines of symmetry. Draw the other three parts so that the polygon is symmetrical.

