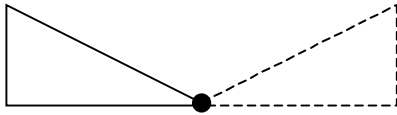


More Practice

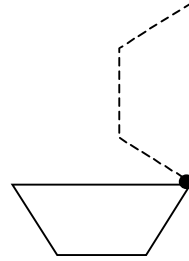
Name _____

Is the movement a quarter turn? Write *yes* or *no*.

1.

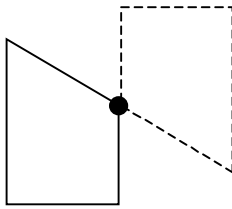


2.

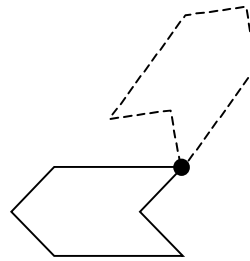


Is the movement a half turn? Write *yes* or *no*.

3.




4.



Problem Solving

5. This turn pattern has 6 figures, but 4 of them are missing. Complete the pattern by rotating the figure a quarter turn each time.



6. How many figures are there before the pattern repeats? _____