

More Practice

Name _____

Compare. Write $<$, $>$, or $=$.

1. 4×3 _____ 5×4





2. 9×4 _____ 7×3


3. 6×5 _____ 3×10





4. 3×6 _____ 5×8


Problem Solving

Use the pictographs to answer questions 5-8.

Favorite Juices of Hillside 2nd Graders	
Apple	
Orange	
Grape	
Pineapple	

Key:  = 4 votes

Favorite Juices of Hillside 3rd Graders	
Apple	
Orange	
Grape	
Pineapple	

Key:  = 5 votes

5. How many 2nd graders picked apple juice as their favorite juice?

6. Compare the 2nd grade's votes for orange juice to the 3rd grade's votes for grape juice. Which juice has more votes? _____

7. How many students voted for pineapple juice? _____

8. Did the same number of 2nd graders vote for orange juice as 3rd graders? Explain.

