

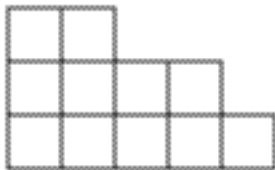
More Practice

Name _____

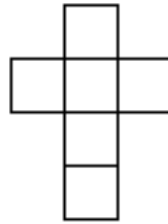
Use the following to answer questions 1–4.



A



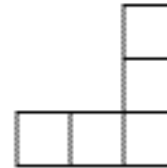
B



C



D

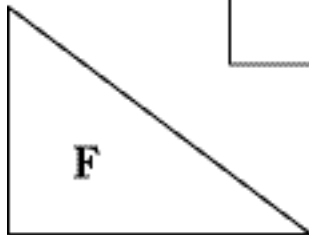


E


1. What is the perimeter of figure B? _____ units
2. Which two figures have the same perimeter? _____
3. Which figure has the perimeter with the least units? _____
4. How much less is the perimeter of figure C than the perimeter of figure B? _____ units

Problem Solving

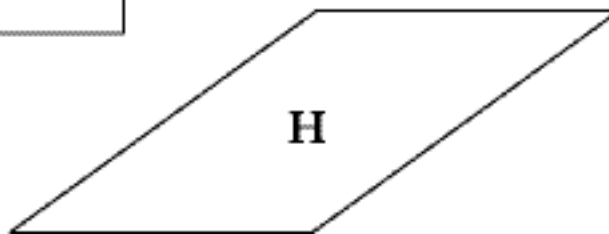
Use a centimeter ruler for questions 5–7.



F



G



H

5. Which two figures have a combined perimeter of 30 cm? _____
6. Figure H has a perimeter that is 4 cm greater than figure _____.
7. How many of the three figures have a perimeter greater than 13 cm? _____