

More Practice

Name _____

Write if the angle is a right angle, an acute angle, or an obtuse angle.

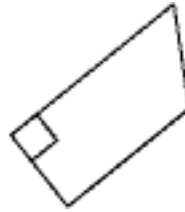
1.



2.



3.

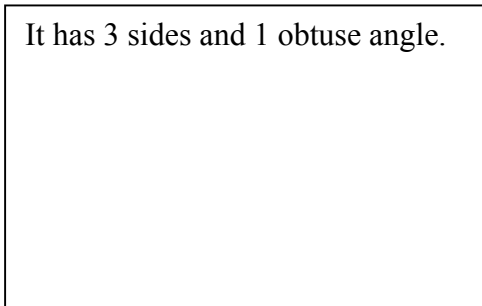


4.

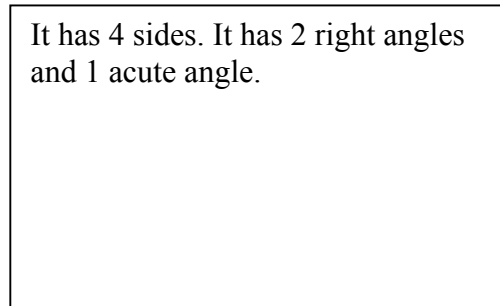


Draw a polygon that fits the description.

5. It has 3 sides and 1 obtuse angle.



6. It has 4 sides. It has 2 right angles and 1 acute angle.



Write the letter of the polygon that matches the description.

7. It has 2 right angles. _____

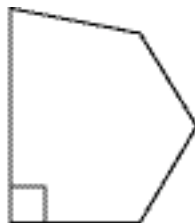
8. It has 3 obtuse angles. _____

9. It has 3 acute angles. _____


10. It has 1 obtuse angle. _____



A



B



C



D

Explain Your Thinking

11. Can a quadrilateral have just one right angle? just 2 right angles? just 3 right angles?
Can it have 4 right angles?

Which of these choices are possible? Explain your thinking or use drawings.