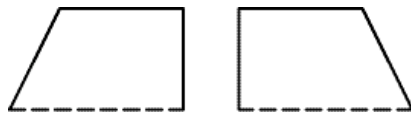


More Practice

Name _____

Ring the letter of the figure you make by joining the sides shown with dotted lines.

1.



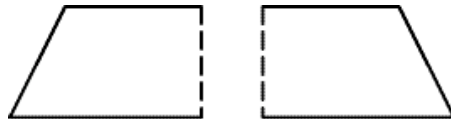
A. rectangle

B. pentagon

C. trapezoid

D. hexagon

2.



A. rectangle

B. pentagon

C. trapezoid

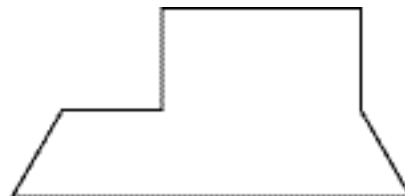
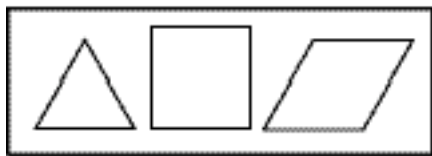
D. hexagon

Problem Solving

3. Separate the polygon into triangles and squares from the box.

How many triangles do you use? _____

How many squares do you use? _____



Explain Your Thinking

4. What is the fewest number of shapes from the box above that you could use to separate the polygon into smaller polygons? Explain.

