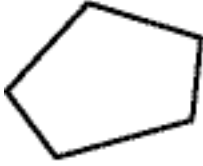


More Practice

Name _____

Name the polygon.

1.



2.



3.



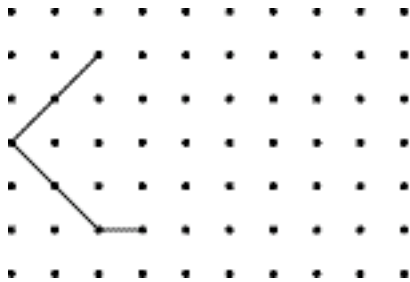
4.



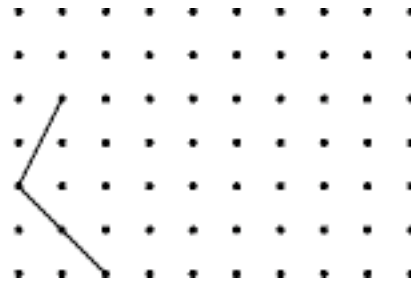
Problem Solving

Complete the figure.

5. a hexagon with 4 congruent sides



6. a quadrilateral with 2 pairs of congruent sides and no square corners.



Explain Your Thinking

7. Draw a quadrilateral that is not a rectangle. Explain why it is not a rectangle.