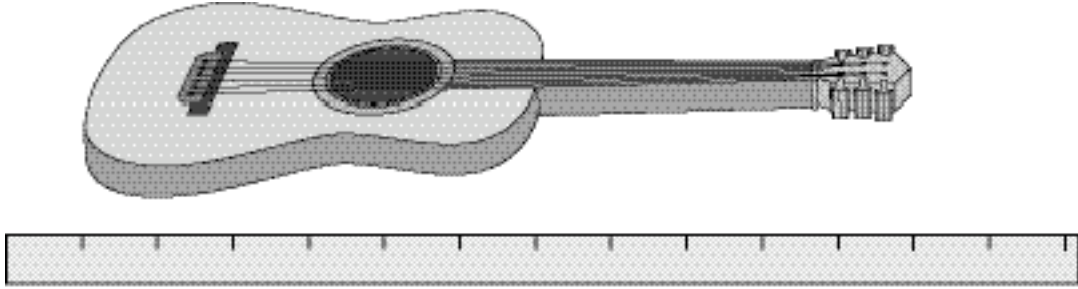


## More Practice

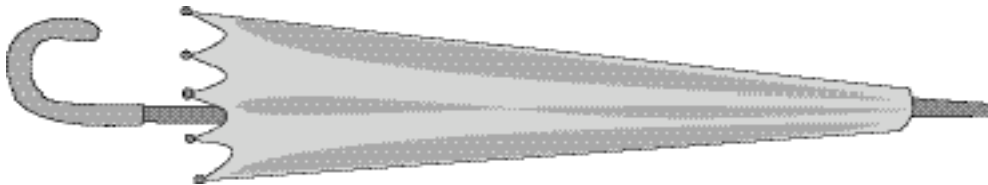
Name \_\_\_\_\_

1. How many centimeters long is the picture of the guitar?



\_\_\_\_\_ cm

2. Use a centimeter ruler to measure the picture of the umbrella. How long is it?

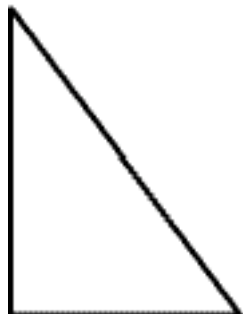


\_\_\_\_\_ cm

3. Draw a rectangle that is 6 cm long and 3 cm wide.

## Problem Solving

4. Measure the length of the triangle. Then tell how much shorter or longer the triangle is than the rectangle above. Circle *shorter* or *longer*.



\_\_\_\_\_ cm

shorter longer