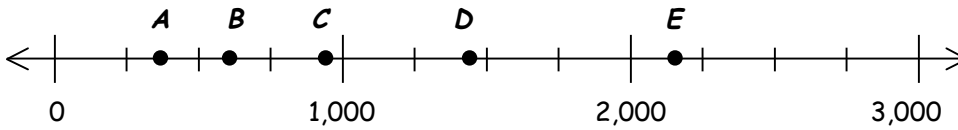


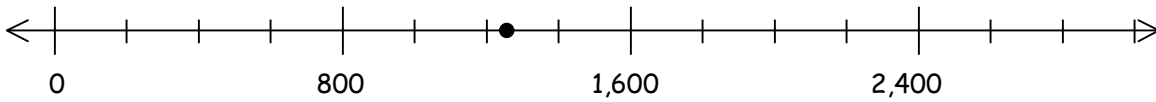
More Practice

Name _____

Use the number line to approximate the number.



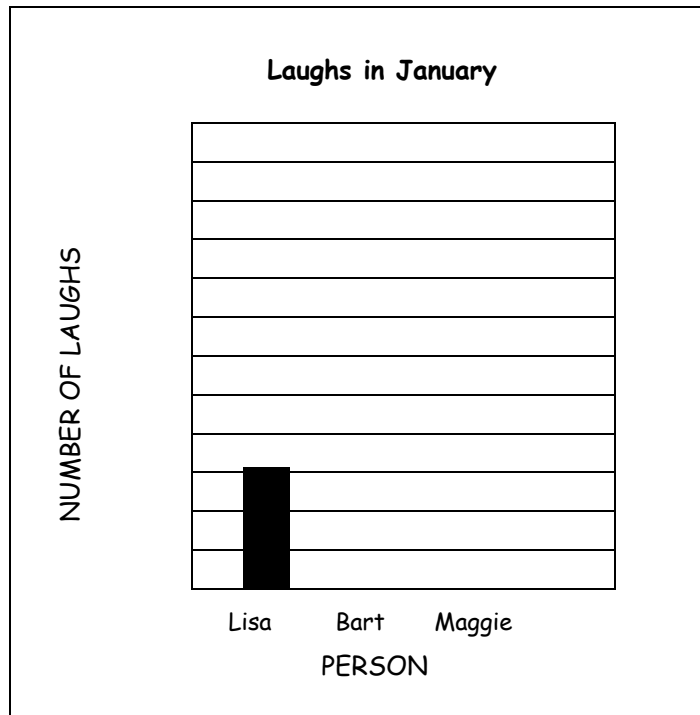
- Which letter shows 921? _____
- Which letter shows 2,130? _____
- Which letter shows 630? _____
- Does *D* show 1,400 or 1,800? _____
- Ring the letter that shows the approximate value for the point.



- A 350 B 1,000 C 1,250 D 1,500

Problem Solving

- Lisa laughed 76 times in January. Use this data to write the scale on the graph.
- Bart laughed 174 times in January. Draw the bar for Bart.
- Maggie laughed 49 more times than Lisa in January. Draw the bar for Maggie.



Explain Your Thinking

- What are some good approximations, or benchmark numbers, that 6,546 is close to? Explain why you chose those numbers.