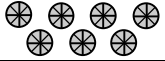





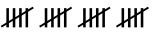




More Practice

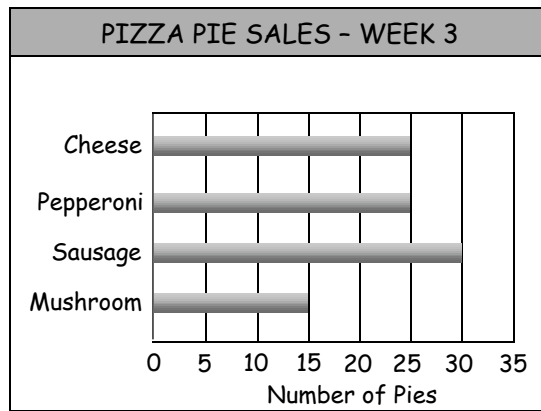
Name _____

Enzo opened a pizzeria. These displays show how many pizzas he sold in three weeks.

PIZZA PIE SALES - WEEK 1	
Cheese	
Pepperoni	
Sausage	
Mushroom	

PIZZA PIE SALES - WEEK 2	
Cheese	
Pepperoni	
Sausage	
Mushroom	

Key:  = 5 pies



- In which week were the most pepperoni pies sold?

- Which pizza was the least popular overall? _____
- How many cheese pies were sold over the three week period?

- Were more sausage pies sold during week 2 or week 3? _____

Explain Your Thinking

- Based on the data, what changes do you think Enzo should make to his pizza pie choices? Explain why you think he should make each change.